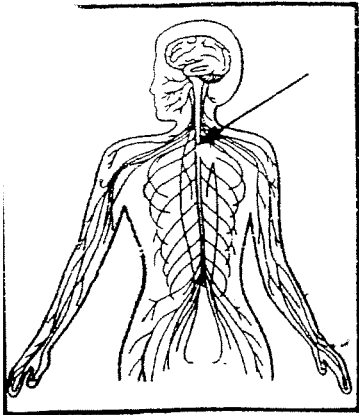
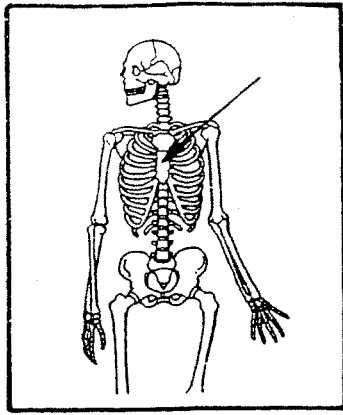


## A Last Look – Part II



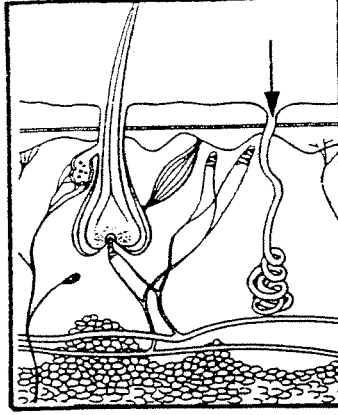
A. \_\_\_\_\_

B. \_\_\_\_\_



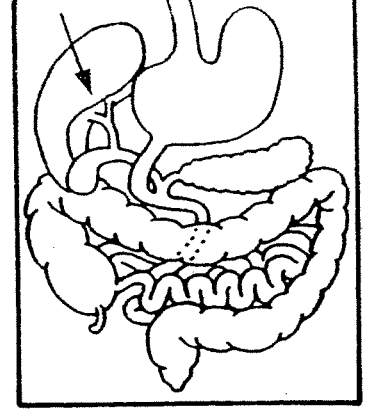
A. \_\_\_\_\_

B. \_\_\_\_\_



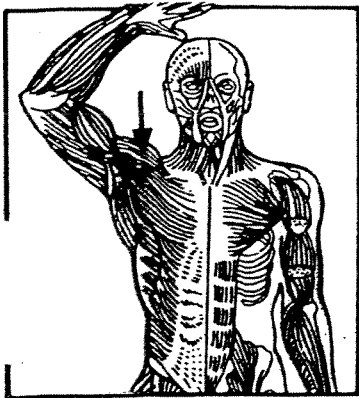
A. \_\_\_\_\_

B. \_\_\_\_\_



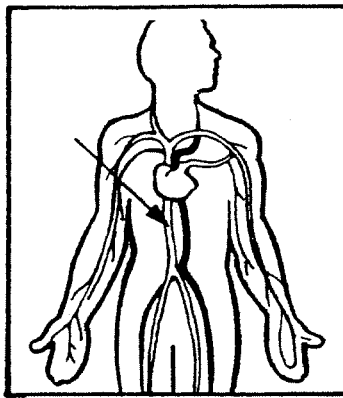
A. \_\_\_\_\_

B. \_\_\_\_\_



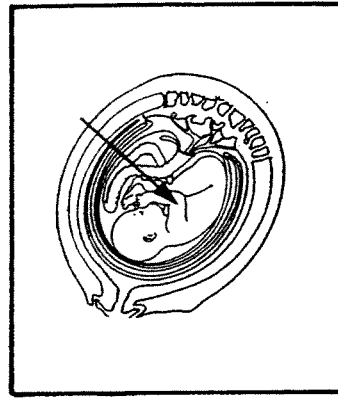
A. \_\_\_\_\_

B. \_\_\_\_\_



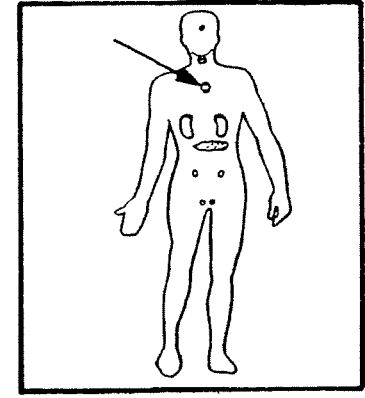
A. \_\_\_\_\_

B. \_\_\_\_\_



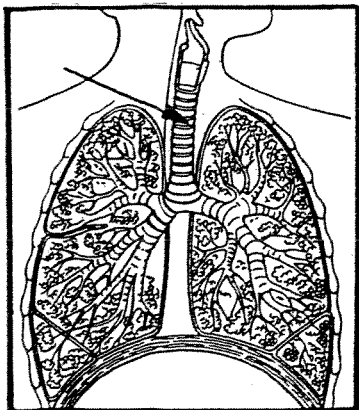
A. \_\_\_\_\_

B. \_\_\_\_\_



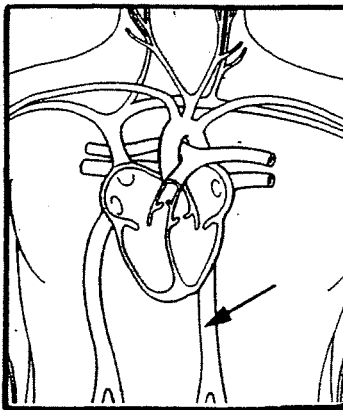
A. \_\_\_\_\_

B. \_\_\_\_\_



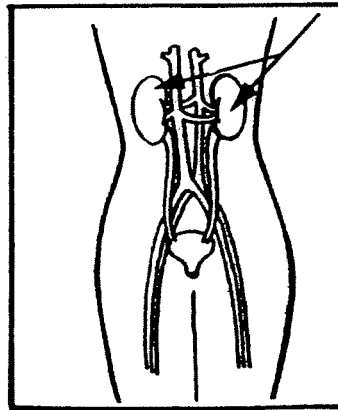
A. \_\_\_\_\_

B. \_\_\_\_\_



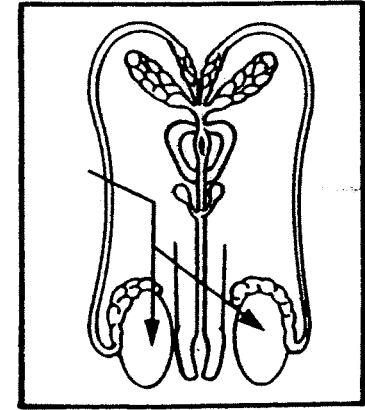
A. \_\_\_\_\_

B. \_\_\_\_\_



A. \_\_\_\_\_

B. \_\_\_\_\_



A. \_\_\_\_\_

B. \_\_\_\_\_

On Line A, name the body part indicated.  
 On Line B, write the body system to which the body part belongs.